

## أتحقق من فهمي الطرح بإيجاد عشرة

أَتَحَقَّقُ مِنْ فَهْمِي

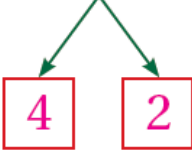


أَجِدُ نَاتِجَ الطَّرْحِ بِإِجَادِ 10:


1

الْحُطْوَةُ 1:

$$14 - 6 =$$




الْحُطْوَةُ 2:



$$14 - 4 = 10$$

الْحُطْوَةُ 3:

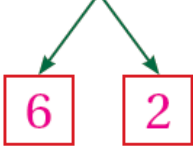


$$10 - 2 = 8$$

إِذَنْ:  $14 - 6 = 8$

2

$$16 - 8 =$$



$$16 - 6 = 10$$

$$10 - 2 = 8$$

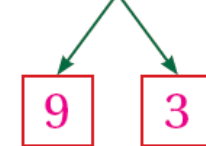
$$16 - 8 = 8$$

منهاجي



3

$$19 - 12 =$$



$$19 - 9 = 10$$

$$10 - 3 = 7$$

$$19 - 12 = 7$$

أَحُلُّ الْمَسْأَلَةَ



مَعَ هِنْدَ 12 لُعْبَةً، أَهَدَتُ صَدِيقَتَهَا 4 مِنْهَا. كَمْ لُعْبَةً بَقِيَتْ مَعَ هِنْدَ؟

$$12 - 4 = 8$$

4